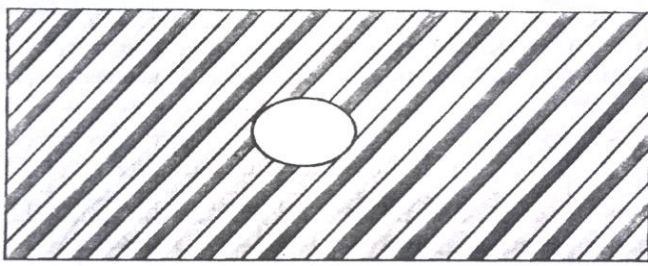





### 1-TOPSHIRIQ.


Gilamchalarga mos keladigan shakllarni tanlang va belgilang.


1



1  


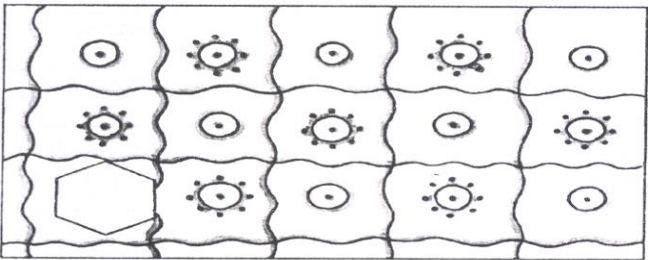
2  


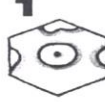
3  



4  


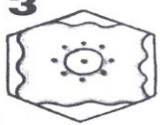
5  



6  



2


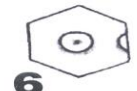
1  


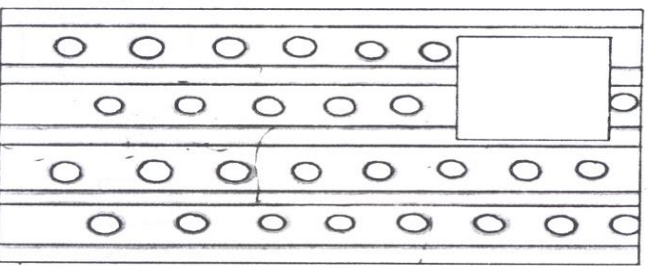
2  



3  



4  



5  


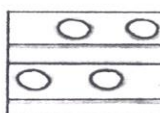
6  


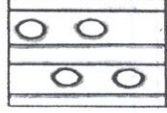
3


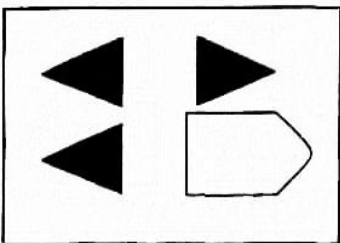
1  



2  


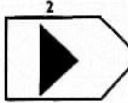
3  


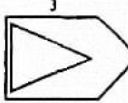
4  



5  


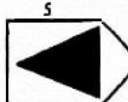
4


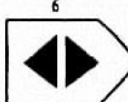
1  


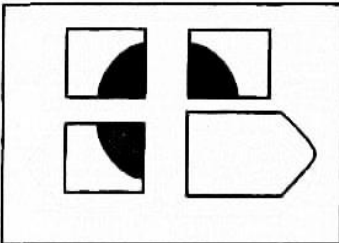
2  


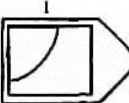
3  


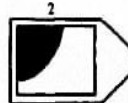
4  


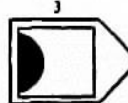
5  



6  


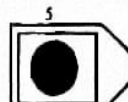
5



1  


2  


3  


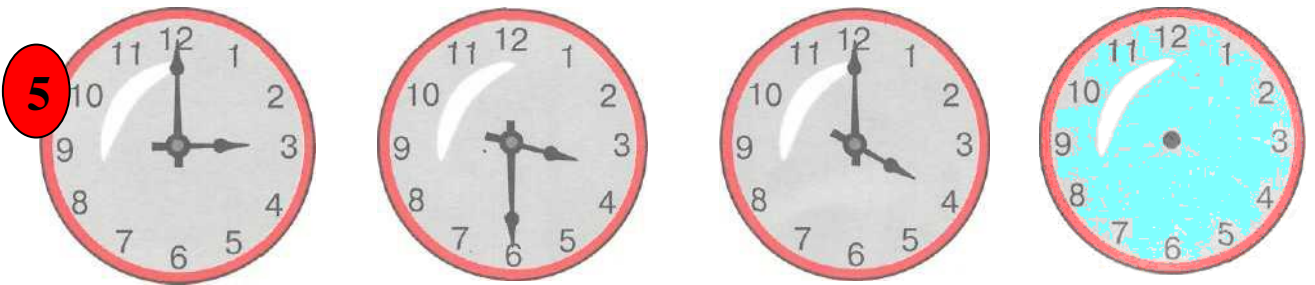
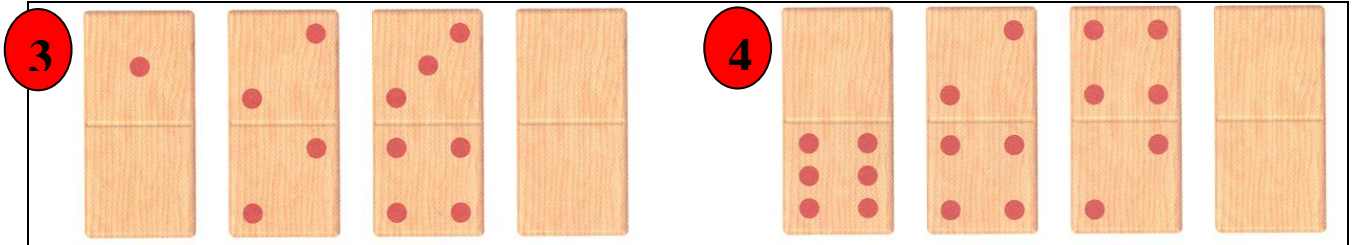

4  


5  


6  



### 2-TOPSHIRIQ.

Qatorlardagi shakllar ma'lum bir qonuniyat asosida joylashtirilgan. Ushbu qonuniyatni toping va qatorni davom ettiring, to'rtinchi soat strelkalari qaysi vaqtni ko'rsatishi kerakligini chizib ko'rsating?



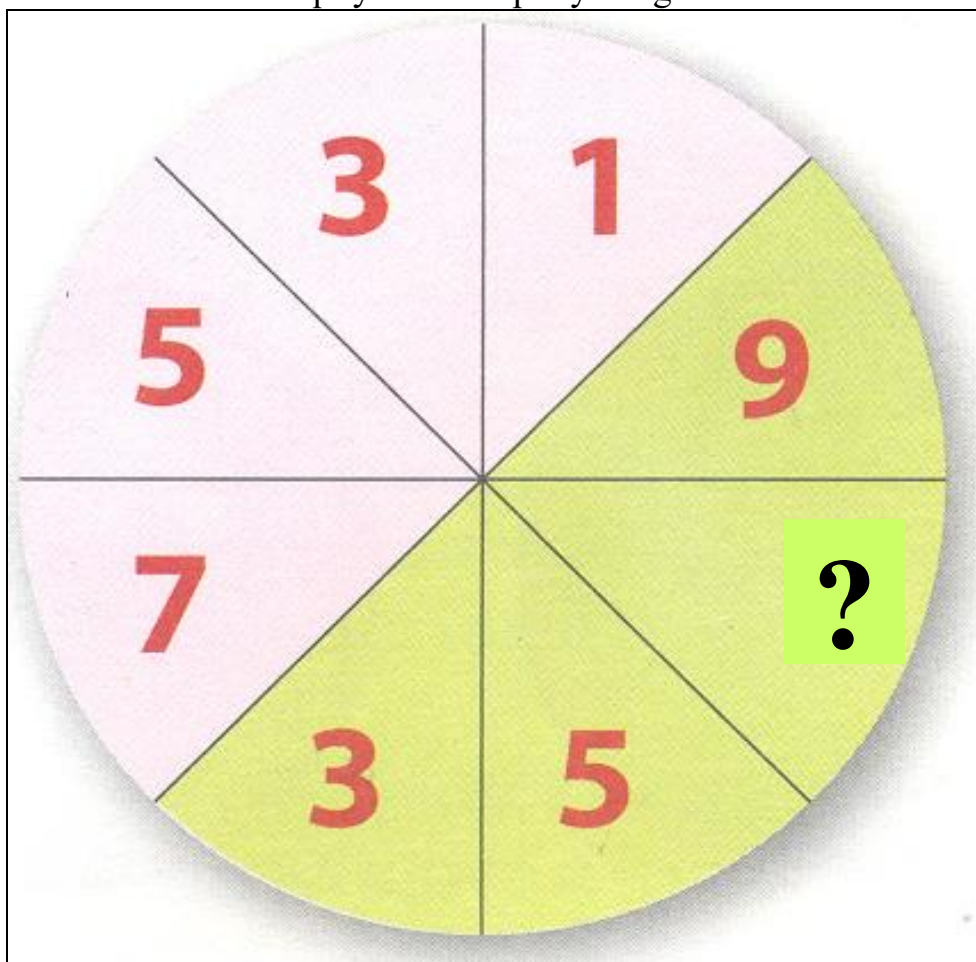
### 3-TOPSHIRIQ.

Raqamlar orasidagi bog‘lanishlarni aniqlab, so‘roq o‘rniga qanday raqam qo‘yilishini topib yozing?



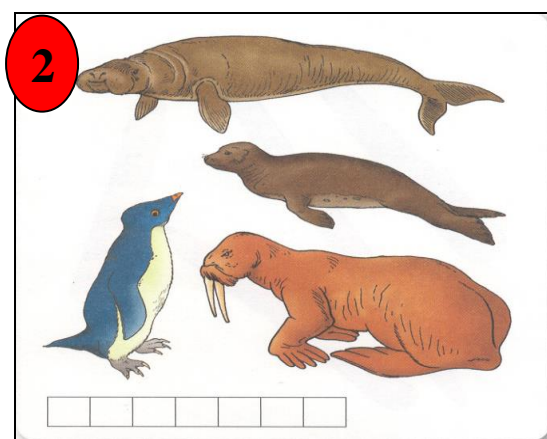
#### 4-TOPSHIRIQ.

Raqamlar orasidagi bog‘lanishlarni aniqlab, so‘roq o‘rniga qanday raqam qo‘yilishini topib yozing?





#### 5-TOPSHIRIQ.

Har bir guruhda berilgan predmetlar orasidan ortiqchasini toping va uning nomini katakchalarga yozing?


















### 6-TOPSHIRIQ.

Na'munada berilgan predmetlar orasidagi bog'lanishga asoslanib, 1-2-3 rasmlardagi xuddi shunday bog'lanishlarni aniqlang va doiraga olingan predmetlarning mantiqiy juftini topib belgilang?



### 7-TOPSHIRIQ.

Doira ichidagi harflardan soʻz tuzing va boʻsh katakchalarga yozib chiqing?

<div style="border: 1px solid black; width: 40px; height: 20px; margin: 0 auto;"></div> <b>1</b>	<div style="border: 1px solid black; width: 40px; height: 20px; margin: 0 auto;"></div> <b>2</b>	<div style="border: 1px solid black; width: 40px; height: 20px; margin: 0 auto;"></div> <b>3</b>	<div style="border: 1px solid black; width: 40px; height: 20px; margin: 0 auto;"></div> <b>4</b>
SH Q YO U	O A T S	O T B I K	A L M Q A

### 8-TOPSHIRIQ.

Savollarga javob bering?

1. Kun va tunning farqi nimada? \_\_\_\_\_
2. Hafta kunlarini tartib bilan yozing? \_\_\_\_\_  
\_\_\_\_\_
3. Qish, bahor, yoz, kuz oylarini yozing?  
\_\_\_\_\_
4. Daqiqa yoki soat, kun yoki hafta, oy yoki yil: Sizningcha qaysi biri uzun? \_\_\_\_\_
5. Beshta dunyo shahar va mamlakatlarning nomini yozing? \_\_\_\_\_  
\_\_\_\_\_
6. Yerning yoʻldoshi qanday nomlanadi? \_\_\_\_\_
7. Daryo bilan koʻlning farqi nimada?  
\_\_\_\_\_
8. Qanday planetalarni bilasiz? \_\_\_\_\_  
\_\_\_\_\_
9. Qanday daryolarni bilasiz?  
\_\_\_\_\_

**Quyida qanday asboblardan foydalanilishini yozing?**

10. Vaqtni oʻlchash uchun- \_\_\_\_\_
11. Masofadan gaplashish uchun- \_\_\_\_\_
12. Yulduzlarni kuzatish uchun- \_\_\_\_\_
13. Ogʻirlikni oʻlchash uchun- \_\_\_\_\_
14. Haroratni oʻlchash uchun- \_\_\_\_\_

### 9-TOPSHIRIQ.

Rasmlar sathida yashiringan harflarni topib bo'sh katakchalarga tartib bilan joylashtirib chiqsangiz kasb nomi kelib chiqadi.




**-REBUSNI YECHING**



→  
.2...

CH




.2..



→  
...4..

CH



.4..

### 10-TOPSHIRIQ.

Belgilar tagida berilgan harflar yordamida bo'sh katakchalarni to'ldiring va maqolni o'qing?

Y	O'	I	Ch	R	K	A	L	S	E	T	B

