

Q.KARIMOVA

# YO‘L HARAKATI XAVFSIZLIGI

2-SINF O‘QUVCHILARI  
UCHUN AMALIY  
MASHG‘ULOTLAR DAFTARI

MAJBURIY  
NUSXA



TOSHKENT-2013

74.200.58- Uza xarakati xavfsizligi. Maxsus  
jurnalga yu

UO'K: 351.811.122  
: 39.808  
Y-58

Yo'l harakati xavfsizligi: 2-sinf o'quvchilari uchun amaliy mashg'ulotlar daftari/ «Avtohamroh» jurnali; tuzuvchi muallif: Q. Karimova. — Toshkent: Yurist-media markazi, 2013. - 32 b.

ISBN 978-9943-387-88-1

UO'K: 351.811.122  
: 39.808

**Tuzuvchi muallif:**

Qumrixon KARIMOVA, «Avtohamroh» jurnali Bosh muharriri, filologiya fanlari nomzodi

**Taqrizchi:**

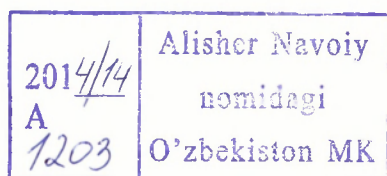
Xayrullo MAMATOV, yuridik fanlar nomzodi, dotsent

Ushbu nashrga doir barcha huquqlar himoya qilingan, suratlar va sharhlar «Avtohamroh» tahririyatiga tegishlidir. «Avtohamroh» jurnali tahririyati roziligisiz, kitobni o'zga usulda chop etish va ko'paytirish taqiqlanadi.

ISBN 978-9943-387-88-1

© «Yurist-media markazi» nashriyoti, 2013 yil

© «Avtohamroh» jurnali



1042247  
091

## Mening yosh do'stim!

Yo'llar va ko'chalarda xavfsiz harakatlanish qoidasini o'rganishni 2-sinfda ham davom ettirasiz.

Daftar-kitobchadagi mashqlarni bajaring va siz yo'llar hamda ko'chalarda xavfsiz va to'g'ri harakatlanish qoidalarini o'rganib olasiz.

Omad Sizga yor bo'lsin!




# 1-MASHG‘ULOT

## NIMA UCHUN BOLALAR YO‘LLARDA FALOKATGA UCHRAYDILAR?



### 1-Topshiriq\*

Rasmlarga diqqat bilan qarang.

Bolakay va qizchadek harakat qilish mumkinmi yoki mumkin emas, rasmning tagiga yozing. Ularning noto‘g‘ri harakatlanishi sababi nimada deb o‘ylaysiz?






*Mumkin emas*



*Mumkin*



\*Topshiriqlardagi matnlarning barchasini o‘qituvchi o‘qib beradi.



## 2-Topshiriq


Ko'rgan rasmlaringizdan bolaning piyodalar yo'lkasidan to'g'ri ketayotganligi tasvirlangan rasmni eslab qoling va xuddi shunday rasmni mana bu sahifada aks ettiring.

Faqat qaramasdan chizing.



### 3-Topshiriq

Bolaning yer osti o'tish yo'liga tushayotgan rasmini eslang va bu yerga chizing.




**Uy topshirig'i:** agarda rasmni mashg'ulot paytida chizishga ulgurmagan bo'lsangiz, uni uyda bajaring. Kerak bo'lsa, buvangiz, buvingiz, dadangiz, oyingiz, akangiz, opangizdan yordam so'rang.

## 2-MASHG'ULOT

### AVTOMOBILLAR VA YO'L HARAKATI QOIDASINING PAYDO BO'LISHI TARIXI



Ot-arava




Bug' dvigatelli birinchi  
avtomobil



Haydovchi. Uni boshqacha shofyor deb ham ataydilar, fransuz tilida uning ma'nosi «o't yoquvchi».



Benzin dvigatelli bi-  
rinchi avtomobil



Zamonaviy avtomobil



## 1-Topshiriq

Rasmlarga diqqat bilan qarang. Tasvirlangan predmetlarning yonida sonlar bor. Bu predmetlarni toping va ularning nomlarini kataklar ichiga yozing. Unda siz krossvord o'rtasidagi alohida yozilgan transport turini bilib olasiz.



1										
2										
			3							
				4						
				5						
				6						
7										

### 3-MASHG'ULOT

DYHX NIMA VA DYN INSPEKTORI KIM?

**DYHXX** – Davlat Yo‘l harakati xavfsizligi xizmati.

**DYPX** – Davlat Yo‘l-patrul xizmati. U DYHXX tarkibiga kiradi.



Bu – DYPX inspektori. U jezl va hushtak yordamida transport va piyodalarning harakatini tartibga soladi.



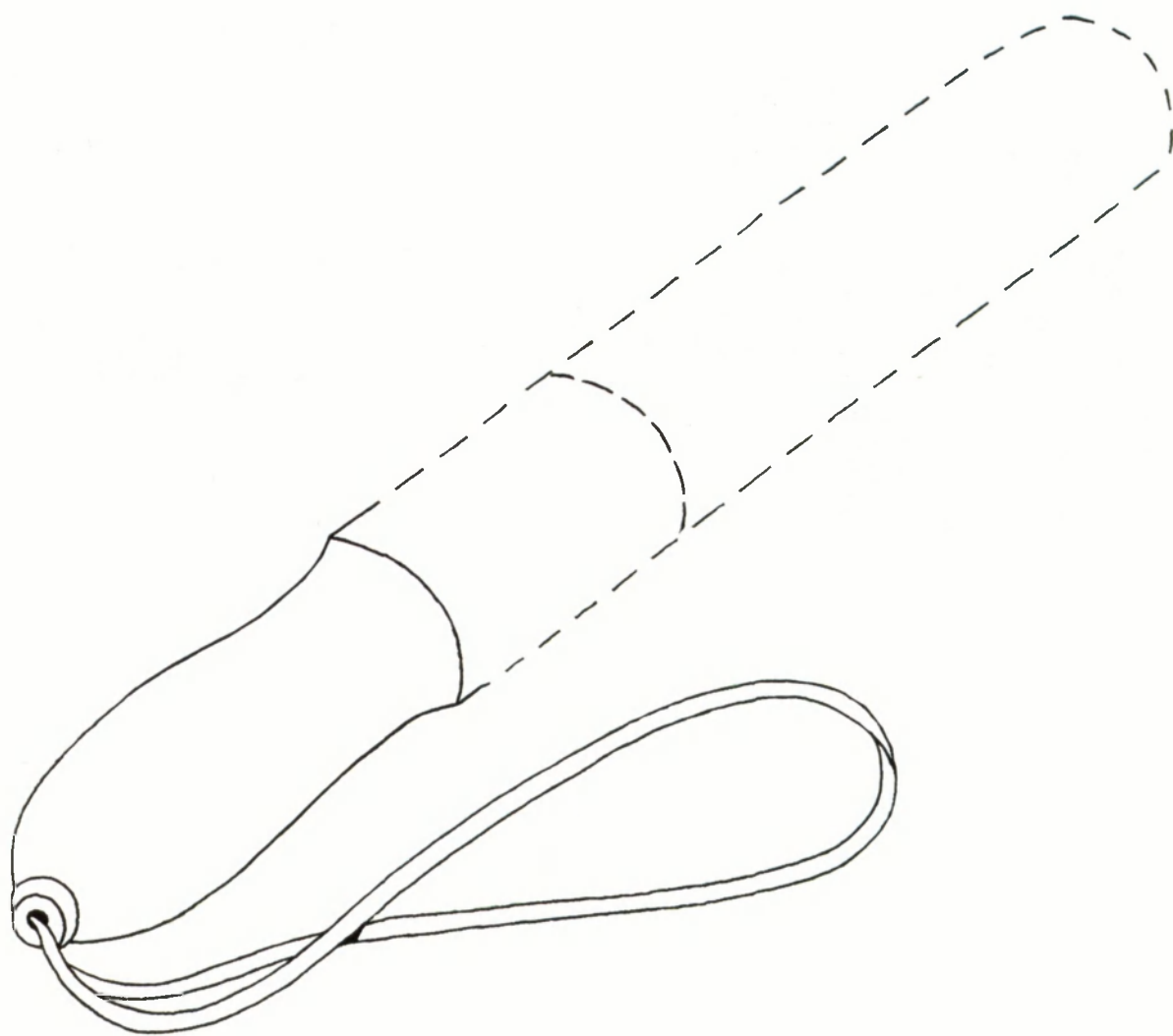
Bu esa patrul avtomobili. Unda DYHXX xodimlari yuradilar va yo‘llardagi tartibni nazorat qiladilar.

## 1-Topshiriq

Rasmdagi 4 harfdan iborat bo'lgan predmet nomini toping va kataklarga yozing.


		<b>Z</b>	
--	--	----------	--

Bu buyumni bo'yang va nima uchun DYPX inspektoriga kerakligini tushuntiring.



## 2-Topshiriq

Rasmlarga qarab, bolakay va qizaloq yo'lining qatnov qismini kesib o'tishganda qanday qilib to'g'ri va xavfsiz harakatlanishlari mumkinligini gapirib bering. Yo'ldan kesib o'tishda qaysi tomonga qarash kerak, Siz nima deb o'ylaysiz?




### Nazorat savollari

1. Agarda svetofor bo'lsa, yo'lining qatnov qismini qanday kesib o'tish kerak?
2. Agar svetofor bo'lmasa, yo'lining qatnov qismini qanday kesib o'tish kerak?
3. Agarda yaqin atrofda svetofor va piyodalar yo'lkasi bo'lmasa, yo'lining qatnov qismini qanday kesib o'tish kerak?

### 3-Topshiriq


Rasmdan o'zlarini ko'chada xavfga qo'yayotgan piyodalarni toping. Ular nimani noto'g'ri qilishmoqda va nima uchunligini tushuntiring?




Sanang va birinchi katakka nechta yo'lovchi xatoga yo'l qo'yayotganini, ikkinchi katakka esa – nechta yo'lovchi yo'lni to'g'ri kesib o'tayotganligini yozing.

## 4-MASHG'ULOT


### SVETOFOR HAQIDA YANGILIKLAR



Rossiyadagi birinchi svetoforning shakli dumaloq bo'lgan. Tartibga soluvchi uning yo'naltirgichini kerakli rangga qo'ygan.



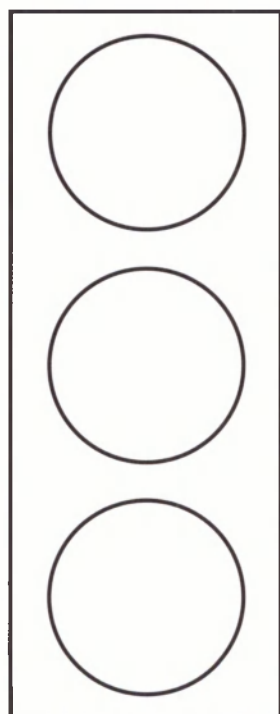
Piyodalar uchun svetofor



Transport vositalari uchun svetofor

#### 1-Topshiriq

Svetoforning yorug'lik ishoralarini bo'yang va yo'naltirgich orqali so'zdan ishoraga o'tkazing.




HARAKATNI TAQIQLAYDI

HARAKATNI TAQIQLAYDI

HARAKATGA RUXSAT BERADI

## 2-Topshiriq

Bu mashinalardan qaysi birlariga svetoforning qizil ishorasida va transport vositasiga qarama-qarshi harakatlanishga ruxsat etiladi? Tasvirdagi quyidagi mashinalarning chetini qizil qalam yoki flomasterda bo‘ylab chiqing.




### Nazoratchi savollar

1. Svetofor nima uchun kerak?
2. Svetoforning sariq chirog‘i nimani bildiradi?
3. Svetoforning piyodalar uchun «to‘xtab turgan qizil odamcha» va «yurayotgan yashil odamcha» belgilari nimani bildiradi?


## 5-MASHG'ULOT

### YO'LLAR VA KO'CHALARDAN O'TISHDA XAVFSIZLIK QOIDALARI

Rasmga qarang.



Bu transport va piyodalarning o'ng tomonlama qatnov yo'li.





Yo'lovchilar uchun eshiklar transportlarning o'ng tomonida joylashtirilganligi rasmda yo'naltirgichlar bilan ko'rsatilgan.





## 1-Topshiriq

Nima deb o‘ylaysiz, bolakay va qizaloqni qanday xavf kutayapti?


Siz ularning o‘rnida bo‘lganingizda qanday yo‘l tutardingiz, gapirib bering.






## 2-Topshiriq

Agarda yo‘l cheti, piyodalar yo‘lkasi va trotuar bo‘lmasa, shahar tashqarisidagi qatnov qismi chetidan bola otasi bilan qanday qilib do‘konga borishi mumkinligini rasmda yo‘naltirgichlar orqali ko‘rsating.



## 3-Topshiriq

O‘ylab ko‘ring, qizcha yo‘lning narigi tomonidagi avtobusga chiqishi uchun yo‘lni qanday qilib kesib o‘tishi kerak? U qaysi tomonga qarashi kerak? U qanday yuradi: to‘g‘ri yoki ko‘ndalang? To‘xtash joyiga qadar uning yo‘lini yo‘naltirgich bilan belgilang.




#### 4-Topshiriq

Nima uchun bola va haydovchining yuzlarida hayratlanish alomatlari bor? Bu yerda nima sodir bo'lmoqda? Yo'lni shu tariqa kesib o'tish mumkinmi? Siz qanday kesib o'tgan bo'lardingiz?




## 6-MASHG‘ULOT

### YO‘LLAR, KO‘CHALAR VA YO‘L BELGILARI HAQIDA YANGILIKLAR



1-rasm



2-rasm

Yangi so‘zlarni o‘rganamiz.

**Ikkitomonlama harakatlanish** – bunda ba‘zi mashinalar bir tomonga yo‘nalsa, boshqalari – qarama-qarshi tomonga harakatlanadi, xuddi 1-rasmdagidek.

**Birtomonlama harakatlanish** – bunda transport vositalari faqat bir tomonga harakatlanadi, xuddi 2-rasmdagidek.

Ikkitomonlama va birtomonlama harakatlanishni bo‘sh kataklarga yozing:

				t					l	a		
--	--	--	--	---	--	--	--	--	---	---	--	--

h	a	r	a	k	a	t	l	a	n	i	s	h
---	---	---	---	---	---	---	---	---	---	---	---	---

				t					l	a		
--	--	--	--	---	--	--	--	--	---	---	--	--

h	a	r	a	k	a	t	l	a	n	i	s	h
---	---	---	---	---	---	---	---	---	---	---	---	---

## 1-Topshiriq

Eslang, transport vositalari harakatlanayotgan yo‘l qismi nima deb ataladi?

Kataklarga yozing.

		t			
--	--	---	--	--	--

q	i	s	m	i
---	---	---	---	---

## 2-Topshiriq

14 yoshga to‘lmagan bolalar qayerda velosiped haydashlari mumkinligini yozing.

1. \_\_\_\_\_

2. \_\_\_\_\_


3. \_\_\_\_\_

4. \_\_\_\_\_



### 3-Topshiriq

Piyodalar tramvaydan tushdilar, ular to‘xtash maydonchasida turib, ikkitomonlama qatnov yo‘li va tramvay yo‘lidan yo‘lning qarama-qarshi tomoniga qanday o‘tish mumkinligini o‘ylashmoqda. Bunda ular qaysi tomonga qarashlari va buni qanday bajarishlari kerakligini ayting?



## 4-Topshiriq

Yangi yo'l belgilarini o'rganing va bilgan yo'l belgilaringizni yana qayta takrorlang.



Velosipedda  
harakatlanish  
taqiqlanadi



Kirish  
taqiqlanadi



Piyodalarning  
harakatlanishi  
taqiqlanadi

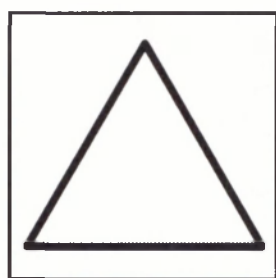


Bolalar


Rasmlarda uchta taqiqlovchi va bitta ogohlantiruvchi yo'l belgilari tasvirlangan. Belgilarga diqqat bilan qarang va ulardagi umumiylikni toping.

## 5-Topshiriq


O'zingiz bilgan yo'l belgilarini chizing va bo'yang.




Piyodalar  
yo'lkasi  
(yo'lovchilar  
uchun belgi)



Piyodalarning yer  
ostidan o'tish joyi



Piyodalarning yer  
ustidan o'tish joyi



Piyodalar  
yo'lkasi (hay-  
dovchilar uchun  
belgi)

## Nazoratchi savollar

1. Yo'l belgilari nima uchun kerak?
2. Taqiqlovchi belgilarning hoshiyasi qaysi rangda?



## 7-MASHG'ULOT


### CHORRAHANI KESIB O'TISH QOIDASI

Chorraha – yo'llarning kesishgan joyi\*.


Yangi so'zni kataklarga yozing va eslab qoling.

C	H	O	R	R	A	H	A
---	---	---	---	---	---	---	---

Chorrahalar tasviri tushirilgan rasmga qarang.



Bu tartibga solingan, ya'ni boshqariladigan chorraha. Svetoforlar transport va piyodalarning harakatini boshqaradi.




Bu esa tartibga solinmagan chorraha. Bu yerda harakatni hech kim boshqarmaydi. Shuning uchun juda ham ehtiyot bo'lish kerak.


\*O'qituvchi bu haqda batafsil ma'lumot beradi.

## 1-Topshiriq

Bular chorralarning tavsiri.



Bola otasi bilan tartibga solingan chorradan yo'lni qanday kesib o'tishi kerakligini gapirib bering.



Bu rasm birinchisidan nimasi bilan farq qilishini tushuntirib bering. Yo'lni kesib o'tishda tartibga solinmagan chorrahada qanday xavf-xatar bor?


Qizcha onasi bilan yo'lni qanday kesib o'tishi kerak?

## 8-MASHG'ULOT


### BIZLAR – YO'LOVCHILARMIZ

#### 1-Topshiriq


Yo'nalishli transport vositalarining tasviriga qarang.  
Ularning nomini kataklarga yozing.




A						S
---	--	--	--	--	--	---



			L	L				
--	--	--	---	---	--	--	--	--



		m			
--	--	---	--	--	--



		k		
--	--	---	--	--

## 2-Topshiriq

Yo'nalishli transport vositalarida eshiklar qaysi tomonda joylashganligini yozing va nimaga shunday ekanligini tushuntiring.


## 3-Topshiriq


Bu avtomobil saloni. 12 yoshga to'lmagan bolalar qaysi o'rindiqda o'tirishlari mumkin emas, o'rindiqdagi dumaloqni qizil bilan bo'yang, yashil rang bilan esa – qayerda o'tirishlari mumkinligini bo'yang.



#### 4-Topshiriq

Tasavvur qiling, bola kattalarsiz yolg'iz o'zi to'xtash maydonchasida. U yo'lni kesib o'tishi va o'z uyi tomon yo'nalishi kerak (quyida qizil yo'naltirgich bilan ko'rsatilgan).

Unga yo'naltirgich orqali xavfsiz yo'lni ko'rsatib, yordam bering.



#### Nazorat savollari

1. Qanday transport vositalari yo'nalishli transport vositalari deb aytiladi?
2. Yo'nalishli transport vositalarida o'zini qanday tush kerak?
3. Yo'nalishli transport vositalaridan tushganda yo'lni qanday kesib o'tish kerak?

## 9-MASHG'ULOT

### MEN – PIYODA VA YO'LOVCHIMAN

#### Nazorat savollari

1. Yo'lning chetida to'xtab turgan mashinalar orasidan yo'lga va ko'chaga chiqish mumkinmi?
2. Svetoforning qaysi ishorasida yo'lni kesib o'tish mumkin?
3. DYHX VA DYN nima? Davlat Yo'l harakati xavfsizligi xizmati xodimi qanday vazifani bajaradi?
4. Transport svetoforlari va piyodalar svetoforlari qanday ko'rinishga ega?
5. Birtomonlama harakatlanishdan ikkitomonlama harakatlanish nimasi bilan farqlanadi?
6. Piyodalar yo'lkasidan yo'lni qanday kesib o'tiladi?
7. Transport vositasi harakatlanayotgan yo'l qismi nima deb ataladi?
8. Yo'l belgilari nima uchun kerak?
9. Chorraha nima?
10. Tartibga solingan va solinmagan chorrohalardan yo'lni qanday kesib o'tiladi?
11. Yo'nalishli transport vositalari deb qanday transport vositalariga aytiladi?
12. Yo'l cheti, piyodalar yo'lkasi yoki yo'lka (tro-tuar) bo'lmasa, kattalar bilan yo'lning qatnov qismida qanday harakatlanish kerak?



**Q.KARIMOVA**

**YO‘L HARAKATI XAVFSIZLIGI**

**2-SINF O‘QUVCHILARI UCHUN  
AMALIY MASHG‘ULOTLAR  
DAFTARI**

Muharrir: Adiba Hamro qizi  
Texnik muharrir: Muhriddin Hamroyev  
Dizayner, sahifalovchi: Eldor Karimov  
Musahhih: Suxrobjon Avvalboyev

Nashriyot litsenziyasi: AI № 221, 16.11.12.  
Bosishga ruxsat etildi: 06.05.2013 yil.  
Shartli bosma tabog‘i: 2,0. Nashr tabog‘i: 1,2.  
Bichimi: 84x108 <sup>1</sup>/<sub>16</sub>. Respect garniturasida. Ofset bosma.  
Adadi: 3000.  
22-12 — buyurtma.  
Bahosi shartnoma asosida.

Nashriyot manzili:  
«Yurist-media markazi» nashriyoti,  
Toshkent shahri, Otchopar ko‘chasi, 82-uy.  
Tel.: 230-04-74, (+99894) 181-27-80.  
E-mail: yurist\_media@mail.ru

Bosmaxona manzili:  
Toshkent sh., Kichik Xalqa yuli  
MChJ «Exclusive print»  
bosmaxonasida chop etildi.  
Bosishga ruxsat etildi: 27.06.13 y.  
Adadi: 3000 nusxa. Buyurtma № 181